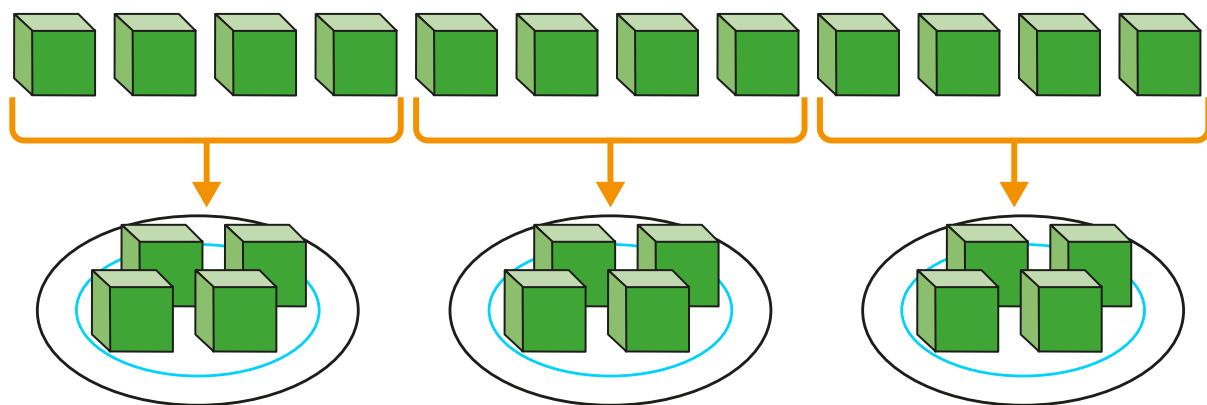


Divide by 3



1



Complete the sentences.

There are 12 cubes.

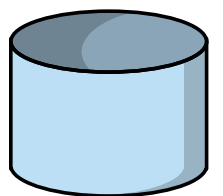
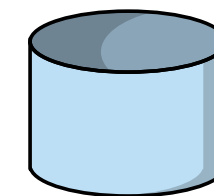
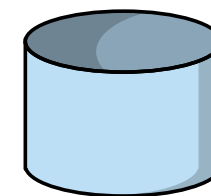

There are plates.

Each plate has cubes.

12 divided into equal groups is

2 Mo has 15 pencils.

He shares them equally into 3 pots.



How many pencils will there be in each pot?

There will be pencils in each pot.

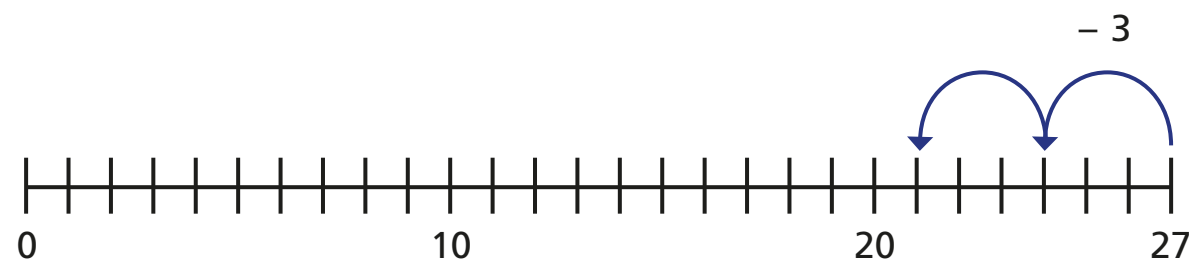
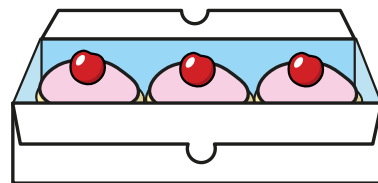
3 Divide 18 counters into groups of 3 counters.

Draw a picture to show what this would look like.

How many groups did you draw?




- 4 There are 27 cakes.
A box can hold 3 cakes.
How many boxes of 3 cakes can be filled?
Use the number line to help you.



boxes of 3 cakes can be filled.

- 5 Complete the bar model for the division $33 \div 3 = 11$



Is there more than one way to do this?

- 6 Complete the division statements for each problem.

- a) Esther has 21 balloons.
She puts them into 3 party bags.
How many party bags does she have?

$$\boxed{} \div \boxed{} = \boxed{}$$

- b) Nijah has 36 apples.
In each box there are 12 apples.

How many boxes are there?

$$\boxed{} \div \boxed{} = \boxed{}$$


- c) 24 children stand in groups of 3
How many children are in each group?

$$\boxed{} \div \boxed{} = \boxed{}$$

- 7 Numbers that follow each other when you count are called consecutive numbers.

Three consecutive numbers can form a staircase.

Here is 4, 5 and 6



When you add three consecutive numbers, the total can always be divided equally by 3

Is this statement correct?

Talk about it with a partner.

